

Staithe's Treasure Hunt



Follow the route and answer the questions. **A great afternoon with beautiful views.** Children have fun spotting things. Older ones exercise your brains on harder questions

October 2017 Edition



The route is approximately 1¼ miles long with some steep hills and steps and takes 1-1½ hours to complete.

Start and finish by the car park at the junction of Staithe's Lane and Whitegate Close TS13 5AD.

All clues are visible without intruding on private areas such as gardens etc.

There is no hidden treasure (that we know of), simply answer the questions and collect the items listed on the next page to get points and the team with the most points wins. Have fun.

Disclaimer: We accept no responsibility for any loss, injury, claim, or damage of any kind resulting from, arising out of or in any way related to this treasure hunt. You and anyone participating in this treasure hunt, do so at your own risk.

Copyright © 2017 Peter Boote Limited, All rights reserved.

You may not copy or reproduce this treasure hunt unless copied as a whole. You may copy it as a whole but may not modify it or sell it.

Name the cottages with these plaques. Look out for them throughout the hunt



1.		
		3 points
2.		
		3 points
3.		
		3 points
4.		
		3 points
5.		
		3 points
6.		
		3 points




7.		
		3 points
8.		
		3 points
9.		
		3 points
10.		
		3 points
11.		
		3 points
12.		
		3 points









13.		3 points	22.		3 points
14.		3 points	23.		3 points
15.		3 points	24.		3 points
16.		3 points	25.		3 points
17.		3 points	26.		3 points
18.		3 points	27.		3 points
19.		3 points	28.		3 points
20.		3 points	29.		3 points
21.		3 points	30.		3 points

Collect the following:







31.	A mirror (2 points) A baseball cap (1 point) A golf ball (2 points) A bus ticket (1 point) A marble (2 points) A chocolate bar wrapper (1 point)	
-----	---	--





Start from the car park and go down Staithes Lane. Half way down, turn right along Brown's Terrace

32.	'Cobles' are flat-bottomed, high-bowed what ?	1 point
33.	 Which house has this train?	1 point
34.	 What words are above this?	2 points
35.	Who planted the gardens?	2 points
36.	 Where?	1 point

37.	Ink ratio (anag)?	2 points
Continue up the hill until 'The Moorings' cottage is straight ahead of you. Go to the left of this cottage to the viewpoint. The view is worth the climb.		
38.	Who made the seats?	1 point
When you have finished enjoying the view, return to the path and turn right down the steps. Work your way down to the main road.		
39.	Look out for the oily old insect (anag)?	3 points
At the bend in the main road go down the alley next to the Corner Bistro and before the bridge turn left. Continue all the way along Wesley Sq & Becks side.		
40.	 Where?	2 points
41.	 Where is this?	2 points
42.	What is Yorkshire Waters emergency number?	1 point
43.	What colour is the porch on the cottage?	2 points
44.	 Where?	2 points
45.	What measures 600 x 450?	3 points
At the top of Becks side turn left down Staithes Lane which becomes High Street		
46.	 Where?	2 points
47.	What did the house with this knocker used to be?	2 points
48.	 Where?	2 points
49.	When was the Primitive Methodist Chapel built?	1 point
50.	 What is this on?	3 points
51.	 What bird is this?	1 point
52.	 Where?	2 points



53.	 Where?	1 point
At the bottom follow the main road round to the right.		
54.	Stylish art a glee (anag)?	1 point
55.	 Where is the Union Jack?	2 points
56.	When was the clock and barometer unveiled?	1 point
57.	So bet Welsh Ken (anag)?	2 points
58.	 What colour is the house?	1 point
59.	What colour is the jacket?	1 point
60.	Name the boat? 	2 points
On reaching the Cod and Lobster keep to the left and follow the railings along in to Seaton Garth		
61.	Who made the railings?	2 points
62.	 What does the symbol represent?	1 point
63.	What shouldn't you feed?	1 point
64.	Who did James Cook work as an assistant to in 1745?	3 points
65.	Who were the champion motor cycle trial riders of the world 1975 and 1997?	3 points
66.	What street is Scarborough Town Hall on?	3 points
67.	What do Roland make?	3 points
68.	How many elephants?	1 point
69.	 Where?	2 points
Double back and go to the left of the public toilet building and through the gap towards the large anchor. Turn left up Church Street and continue to St Helier.		

70.	What island is written on the large anchor?	1 point
71.	What street is the narrowest in the UK?	2 points
72.	 Where is this?	2 points
73.	What was the trade of St Peter?	3 points
74.	 What does the owner of this house sell?	3 points
At St Helier go through the alley and turn right. Continue down the path until you reach the narrowest street on the right.		
75.	What creature is on Fisherman's cottage?	2 points
Turn left up the steps. Continue up High Barrass, then left up Mount Pleasant.		
76.	How many bells ?	1 point
77.	What cottage has a red rose?	2 points
78.	What was the name of the sparrow that died in March 1901?	3 points
79.	Or kiss gnome (anag)?	3 points
Continue along The Old Stubble and join Staithes Lane.		
80.	What do Sugg make?	3 points
81.	 House number ?	2 points
Continue up Staithes Lane until the junction by the car park is reached.		
82.	What number is the trig point?	3 points
83.	 House number?	2 points
84.	What is the large cream building behind the war memorial?	1 point
		Total

If you have enjoyed this treasure hunt, you may like to try our others – visit www.CluesGo.co.uk
We welcome any feedback – please visit www.CluesGo.co.uk/contact.htm